


Charlie

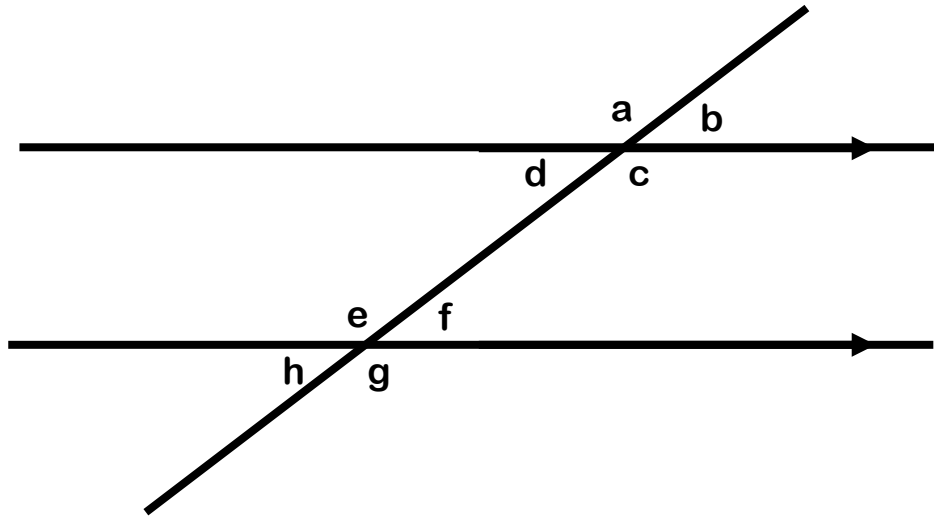


Angles in Parallel Lines Tick or Trash

Tick one answer and trash the other!



Lola




Add to 180°	a and c	Vertically Opposite
Co-interior	c and f	Corresponding
Alternate	d and f	Co-interior
Vertically Opposite	g and e	Alternate
Co-interior	a and e	Corresponding
Vertically Opposite	h and g	Add to 180°
Co-interior	c and e	Alternate
Add to 180°	b and d	Vertically Opposite
Co-interior	d and e	Corresponding
Alternate	g and a	Corresponding
Vertically Opposite	h and e	Add to 180°

Charlie

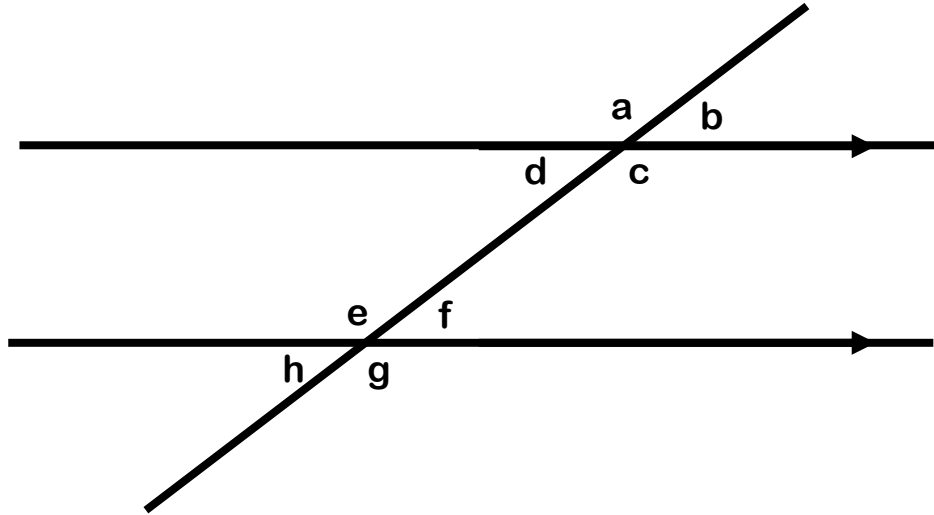


Angles in Parallel Lines ANSWERS

Tick one answer and trash the other!



Lola



Add to 180°	a and c	Vertically Opposite
Co-interior	c and f	Corresponding
Alternate	d and f	Co-interior
Vertically Opposite	g and e	Alternate
Co-interior	a and e	Corresponding
Vertically Opposite	h and g	Add to 180°
Co-interior	c and e	Alternate
Add to 180°	b and d	Vertically Opposite
Co-interior	d and e	Corresponding
Alternate	g and a	Corresponding
Vertically Opposite	h and e	Add to 180°