

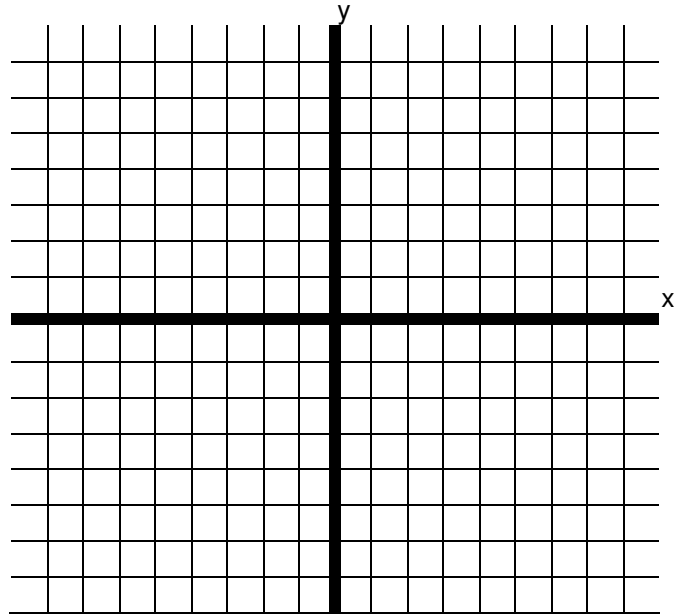
Algebra

Relations and Functions

YAY MATH!

Students will be able to complete the following problems while watching the video:

Please graph the following points: (2,3) (-5,4) (-7,-3) (6,-3)



Definitions:

Example set given:

Relation:

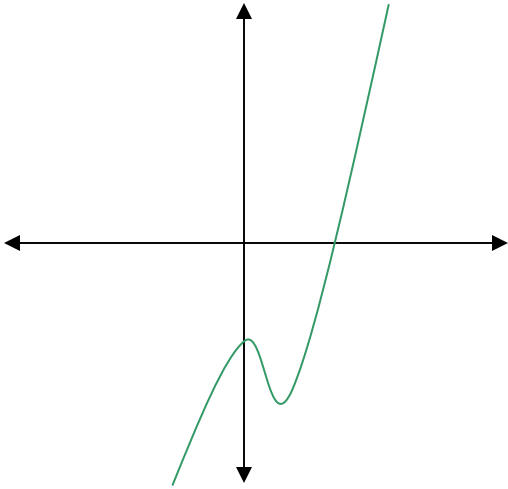
{ (,) (,) (,) (,) }

Domain:

Range:

Function:

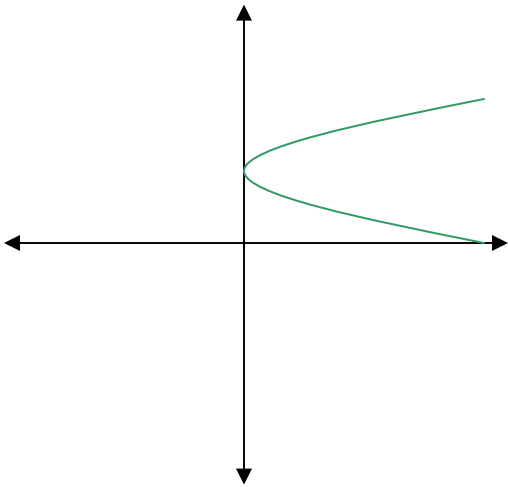
(1, 5)	Domain:	.1, 10	Function?
(2, 3)	Range:	.1, 20	
(5, 7)	Function?		
(4, 7)			



Function? (Yes / No)

Domain:

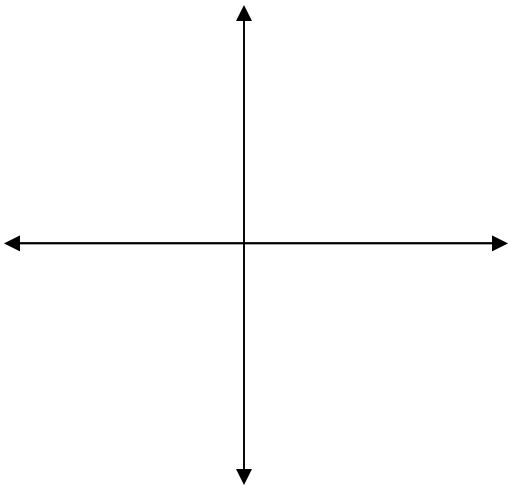
Range:



Function? (Yes / No)

Domain:

Range:



$$y = 2x - 1$$

Function? (Yes / No)

Domain:

Range: