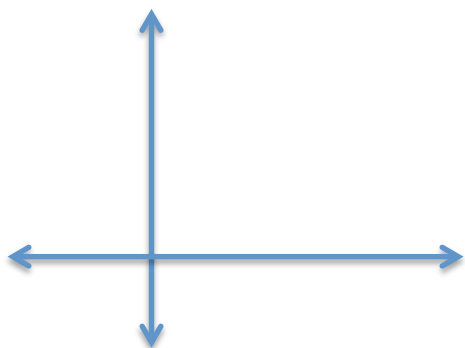


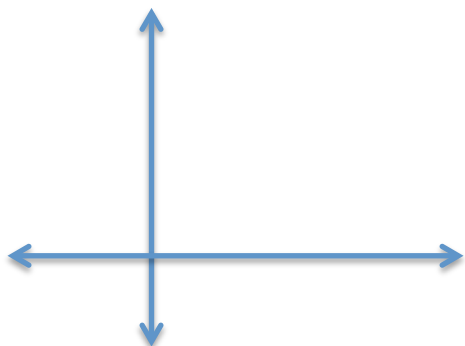
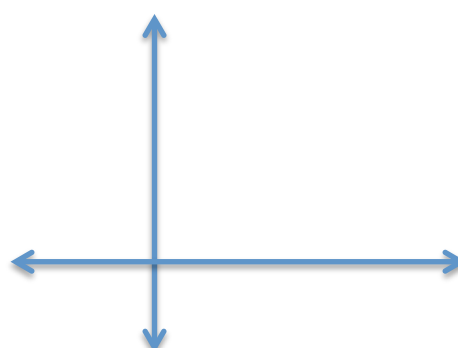
Trigonometry - Circular Functions & Unit Circle

The video covers the following exercises. Print this sheet and work with the group!



$\sin \theta =$

$\cos \theta =$



$\sin 30^\circ =$

$\cos 30^\circ =$

